


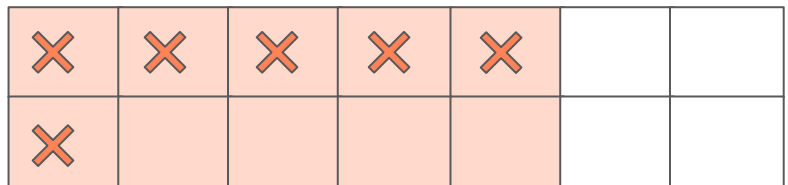
# Write the Subtraction Sentence

Write the subtraction sentence that the given bar model shows.

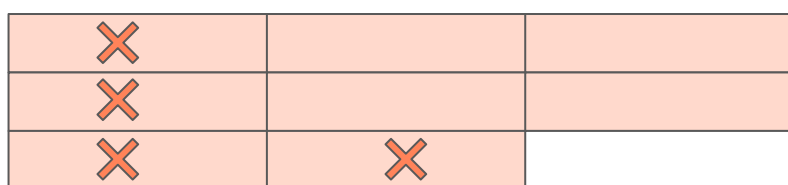
$$\frac{5}{7} - \frac{\square}{7} = \frac{\square}{\square}$$



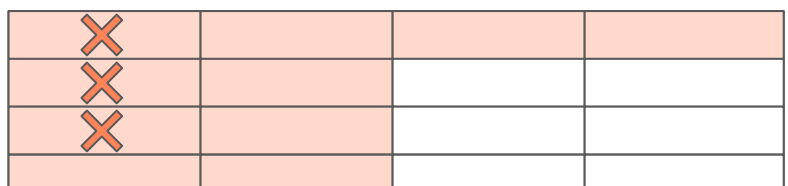
$$\frac{\square}{\square} - \frac{\square}{\square} = \frac{\square}{\square}$$



$$\frac{\square}{\square} - \frac{\square}{\square} = \frac{\square}{\square}$$



$$\frac{\square}{\square} - \frac{\square}{\square} = \frac{\square}{\square}$$



$$\frac{\square}{\square} - \frac{\square}{\square} = \frac{\square}{\square}$$

