



Let's Find the Missing Number

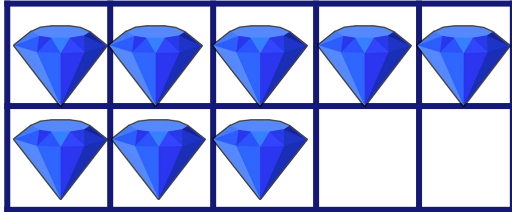
Use the frame to solve the subtraction problem. Cross out the objects to find the missing number.




$$4 - \square = 2$$



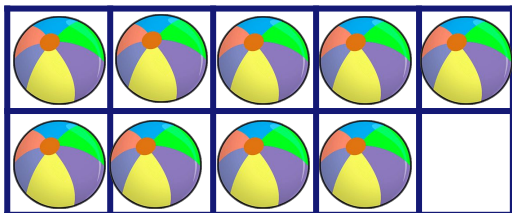
$$6 - \square = 3$$



$$8 - \square = 7$$



$$7 - \square = 3$$



$$9 - \square = 4$$